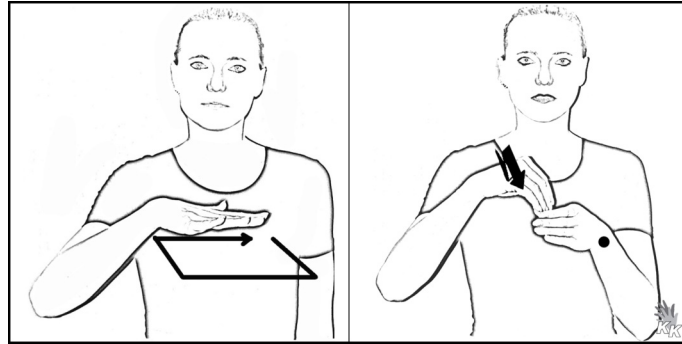


Flächeninhalt (A)

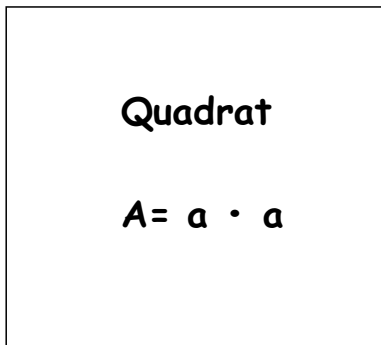


Merke: Flächeninhalt = A

Flächeninhalt = _____ · _____



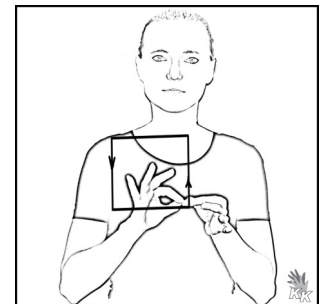
Rechnung:



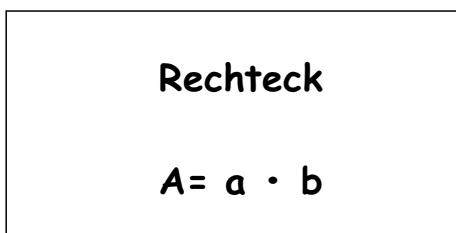
a

$$a = 4 \text{ cm}$$

$$\begin{aligned} A &= a \cdot a \\ A &= 4 \text{ cm} \cdot 4 \text{ cm} \\ A &= 16 \text{ cm}^2 \end{aligned}$$



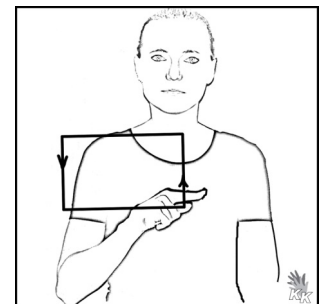
Quadrat



a

$$\begin{aligned} a &= 2 \text{ cm} \\ b &= 5 \text{ cm} \end{aligned}$$

$$\begin{aligned} A &= a \cdot b \\ A &= 2 \text{ cm} \cdot 5 \text{ cm} \\ A &= 10 \text{ cm}^2 \end{aligned}$$



Rechteck

Quellen:

Gebärdensbilder aus: Der Gebärdensbaukasten, Verlag Karin Kestner,
www.kestner.de

<https://getschoolcraft.com/de/>